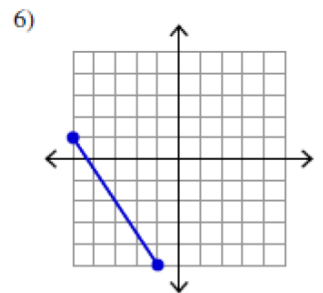
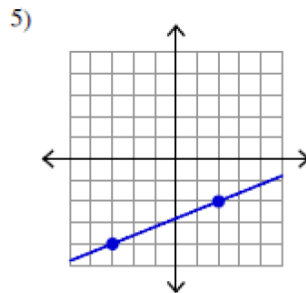
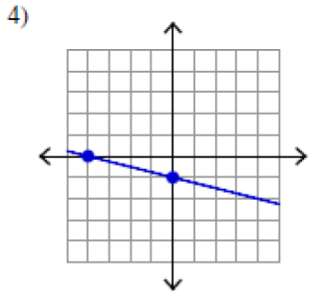
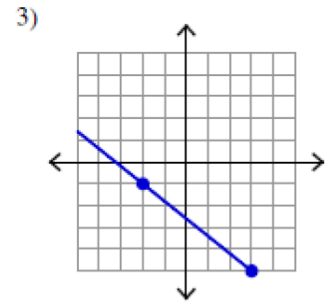
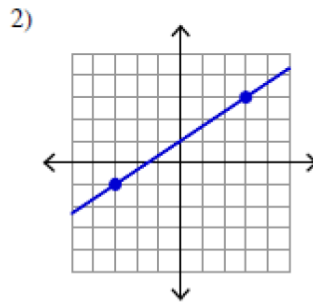
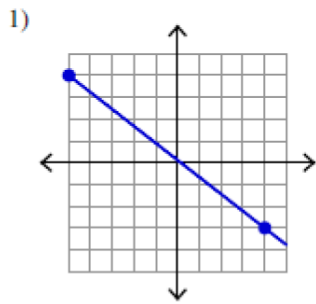


Practice Work – Slope

Find the slope of each line.



Find the slope of the line that passes through each pair of points. Show your work!

1)  $19, -16$  ,  $-7, -15$   $m = \underline{\hspace{2cm}}$

2)  $20, 8$  ,  $9, 16$   $m = \underline{\hspace{2cm}}$

3)  $17, -13$  ,  $17, 8$   $m = \underline{\hspace{2cm}}$

4)  $19, 3$  ,  $20, 3$   $m = \underline{\hspace{2cm}}$

5)  $3, 0$  ,  $-11, -15$   $m = \underline{\hspace{2cm}}$

6)  $-3, -3$  ,  $-5, -12$   $m = \underline{\hspace{2cm}}$